

AUM SUN PUBLIC SCHOOL
Holiday Homework (2025-2026)
Holiday Homework
Class 5th

Submit work from - 21st May to 31st May

SUBJECT - HINDI

यह सभी कार्य सायं 6:00 से पूर्व भेजना है।(8126923835)

1. प्रतिदिन एक पेज सुलेख का कीजिए।
2. प्रतिदिन 10 शब्दों की इमला अपने अभिभावक से लीजिए तथा गलत शब्दों का सुधार करके तीन बार लिखिए।
3. मेरी मां वह मेरा विद्यालय पर आठ_आठ लाइन लिखिए।
4. पांच भारतीय त्योहारों के चित्र लगाकर उनके बारे में पांच _पांच लाइन लिखो।
5. विलोम शब्द लिखिए।

अपना, रात, उल्टा, बंद, देसी खट्टा, माता, भाई, अंदर, अंबर।

Send your work to this number: 8216923835 (Priyanka Mam) Section A

8218159308 (Rashmi Mam) Section B

SUBJECT - ENGLISH

1. Write 10 lines of cursive writing daily.
2. Read a newspaper daily and write five difficult words with their meanings.
3. Taking a break from studies once in a while is very important. It freshens up our body and mind. What is your favorite indoor hobby during holidays? Write a paragraph describing it.

Send your work to this number : 8755185159 (Neha Mam)

9675356688 (Swati Mam)

SUBJECT - GRAMMAR

Note - Do your holiday homework in separate notebook

1. Learn and write definition of sentence and its types and also give five example of each definition .
2. Make a chart on A4 sheet on the topic gender .
3. Form the abstract nouns by adding some suffixes

- 1-kind
2. Grow
- 3.liberate
- 4.Human
5. Punish
6. Declare
- 7.equal
- 8.operate
9. Move
10. Choose

Send this work to these numbers-

Section A- 8755185159(Neha mam)

Section B- 9717849331 (Nishi mam)

SUBJECT - MATHS

Q1. Write each of the following numbers in word using:

1. Indian system
2. International system
- a. 321424519
- b. 124512045
- c. 93450001
- d. 4000012

Q2. Write each of the following number in an expanded form:

1. 4,93,204
2. 4,00,56,041
3. 96,24,00,001
4. 86,00,41,430

Q3. Write the successor and predecessor of the following:

1. 25,40,40,900
2. 10,00,00,000
3. 46,01,00,799
4. 43,29,486

Q4. Arrange the following as ascending and descending order:

1. 2,322,435; 22,35,354; 45,766,213; 8,22,00,237
2. 85,48,741; 93,32,185; 2,24,30,433; 38,45,290

Q5. Round off the following numbers nearest 10, nearest 100, nearest 1000.

1. 43240
2. 768284

3. 2154300

4. 2154209

Q6. Write in Roman numerals:

a. 250 b. 526 c. 1720 d. 2130

Q7. Find the difference the place value and face value of 5 in each of the following:

1. 54,70,16,000

2. 96,43,20,152

Activity: Write roman numerals 1 to 100 and circle odd number with green colour and circle even number with blue colour.

Send your work to this number: 9266747060 (Prachi Mam)

9675356688 (Swati Mam)

SUBJECT - SOCIAL STUDIES

Q.1 Write the maximum and minimum temperatures of daily with mentioning proper date and day. (NOTE: Do this work on A4 sheet)

Q.2 Fill in the blanks:-

1. _____ longitudes can be joined to form a circle.

2. A Globe is a _____ dimensional model of the Earth.

3. Blue colour is used to depict _____ on a map.

4. Revolution of the Earth causes _____.

5. _____ days are there in a Leap year.

6. There are _____ heat zone on the earth.

7. _____ is the longest line of latitude.

8. The study of map-making is called _____.

Q.2 Unscrambled Word:-

1. The other name of Antarctic Ocean. ESROUHTN CEONA _____.

2. A network of parallel lines. DGIR _____.

3. The sea located to the east of India. YBA FO LBAEGN _____.

4. A book of Maps. SAATL _____.

5. Moisture present in the air. YHTUIMDI _____.

Send your work to this number: 8279428522 (KIRTI MA'AM)

SUBJECT - DRAWING

Worksheet 1

1- Make flowers with the help of tissues and waste bottle caps.

2- Make wall hanging with the help of cardboard.

Send your work to this number: 9654970965 (Himanshi Mam)

SUBJECT - SCIENCE

Note - Do this work in a separate notebook

Q1) Define the following terms.

1) Germination -

2) Migration -

3) Blubber -

4) Luminous object -

Q2) Grow a seed in a pot at your home and observe the process of germination.

Q3) Write the ways in which animals like cobra , butterfly, giraffe and eagle get their food.

Q4) Draw diagrams of -

1) Bean seed

2) Germination

3) Grafting

Q5) Give two examples of -

1) Aquatic animals -

2) Opaque objects -

3) Desert animals -

4) Parts of plants -

5) Flightless birds -

Send your work on this number : Aakansha Mam(7467067150)

Computer Worksheet

Name : _____ Date : _____

Topic : Types of Computers

Label the name of computer type using the given cloud.

Smart Phone

Desktop Computer






Tablet

Laptop



The History Of Computers

I. Match the early calculating devices(By drawing lines)

1. 	a. Tabulating machine
2. 	b. Napier Bones
3. 	c. Abacus
4. 	d. Analytical Engine
5. 	e. Difference Engine

Q.2. using pictures from news papers and magazines make a chart on primary and secondary storage device .

Send your work to this number: 7906751325 (Sheetal mam) Section B

7895230186 (Himani Mam) Section A

SUBJECT - G.K

GK

Note- Do your holiday homework in separate notebook

1. Learn and write 10 current affairs daily.
2. Make a chart of top 10 Presidential residences.
3. Learn and write chapters-11,12,13 and 14.
4. Write down 20 points on yoga day.
5. Read daily International newspaper and paste 5 headlines in your separate notebook.

Send this work to these numbers

Section A- Himani mam(7895230186)

Section B- Sheetal mam(7906751325)